










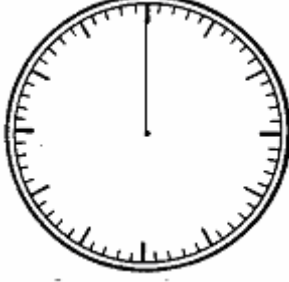


Ehliyet-Saat/ Bronz/Saatlerde Akrep(b)i küçük göstergeyi çiz!



1. Aşağıdaki saatlerde akrebi kırmızı kalemle çiz!

		
Saat 7. / Saat yedi.	Saat 9. / Saat dokuz.	Saat 11. / Saat on bir.
		
Saat 5. / Saat beş.	Saat 4. / Saat dört.	Saat 10. / Saat on.
		
Saat 6. / Saat altı.	Saat 5. / Saat beş.	Saat 12. / Saat on iki.
		
Saat 2 / Saat iki.	Saat 1 / Saat bir.	Saat 3 / Saat üç.

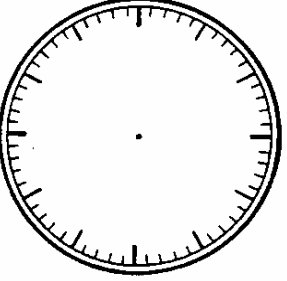
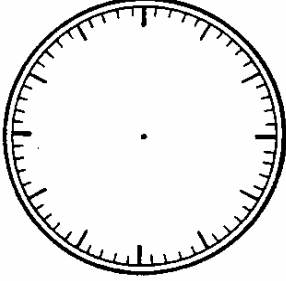
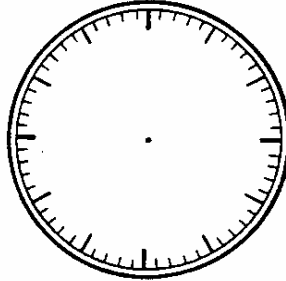
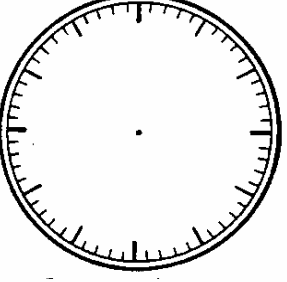
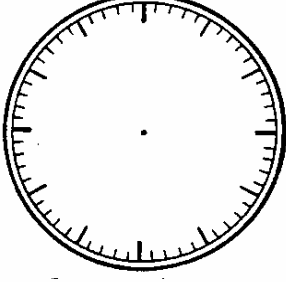
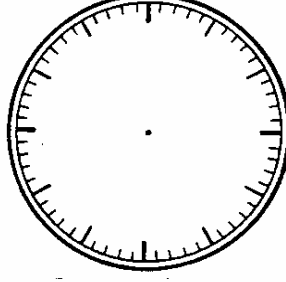
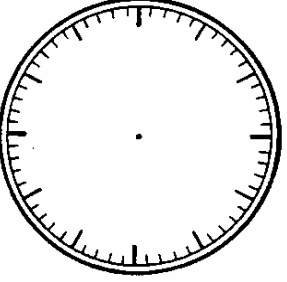
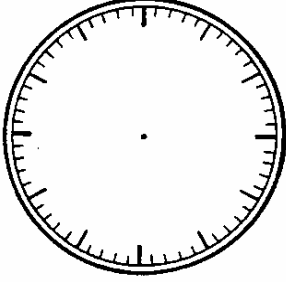
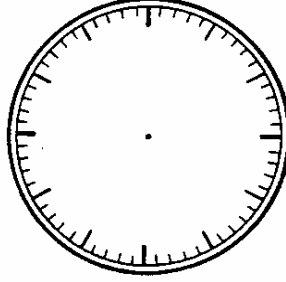
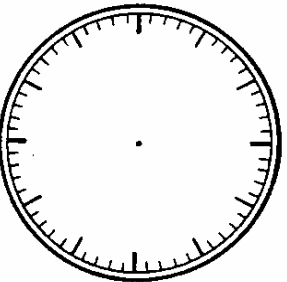
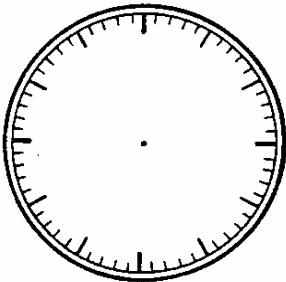
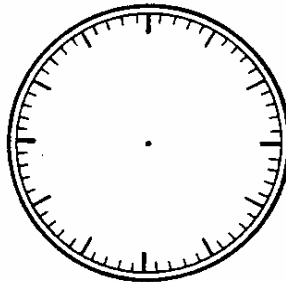
2. Yelkovanı (büyük göstergeyi) mavi kalemle çiz!

3. Saatlerin içine eksik olan sayıları yaz!

Ehliyet-Saat/ Bronz/Saatlerde Akrep(b)i ve Yelkovanı çiz!



1. Saatlerde Akrepi kırmızı, Yelkovanı mavi kalemle çiz!

		
Saat 2 / Saat iki.	Saat 10. / Saat on.	Saat 11. / Saat on bir.
		
Saat 5. / Saat beş.	Saat 4. / Saat dört.	Saat 12. / Saat on iki.
		
Saat 6. / Saat altı.	Saat 9. / Saat dokuz.	Saat 1 / Saat bir.
		
Saat 7. / Saat yedi.	Saat 5. / Saat beş.	Saat 3 / Saat üç.

2. Saatlerin içine eksik olan sayıları yaz!

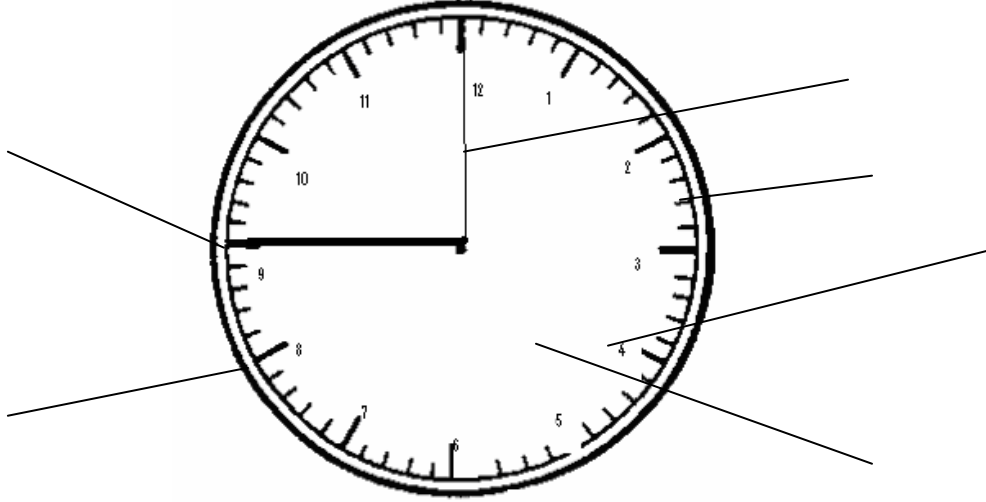
Adım: _____



Ehliyet-Saat/ Bronz /Genel Prova

1. Bu saatin kısımlarını aşağıdaki sözcüklerle adlandır!

akrep- yelkovan- kadran- dakika çizgisi- saat çizgisi- rakamlar



Saat _____ . / Saat _____ .

2. Aşağıdaki saatlerde Akrepi kırmızı, Yelkovanı mavi ile çiz!

3. Eksik olan rakamları tamamla!

Saat 7. / Saat yedi.	Saat 9. / Saat dokuz.	Saat 11. / Saat on bir.
Saat 5. / Saat beş.	Saat 4. / Saat dört.	Saat 10. / Saat on.

Sınav için tavsiye: _____

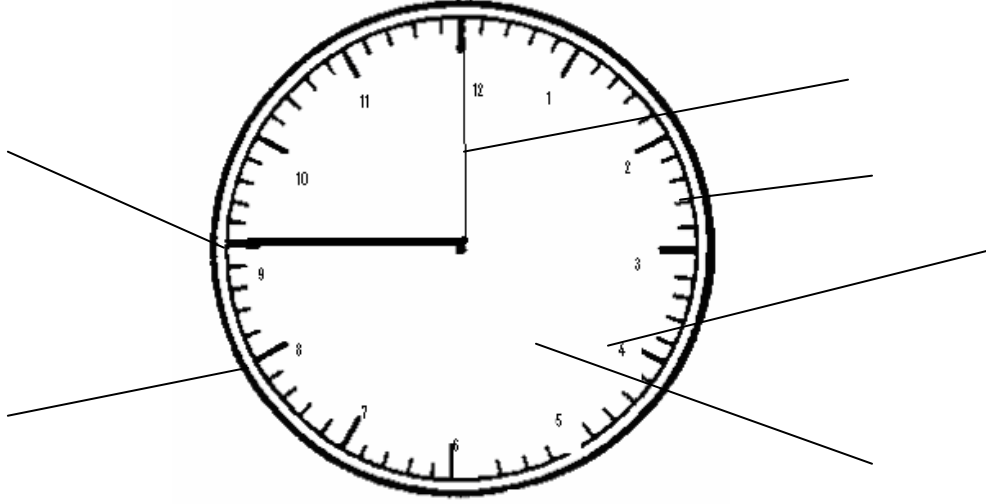
Adım: _____



Ehliyet-Saat/ Bronz /Sınav

4. Bu saatin kısımlarını aşağıdaki sözcüklerle adlandır!

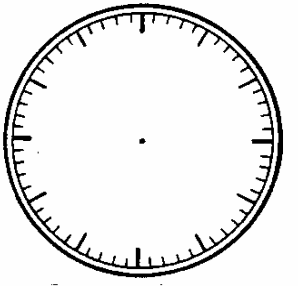
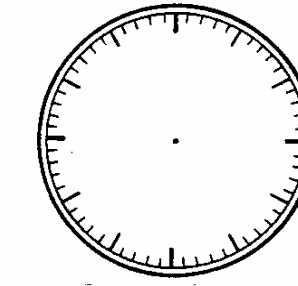
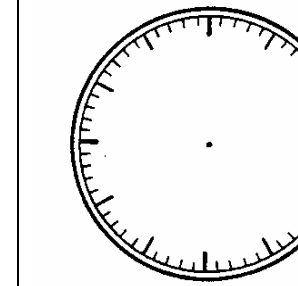
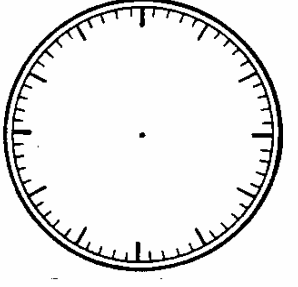
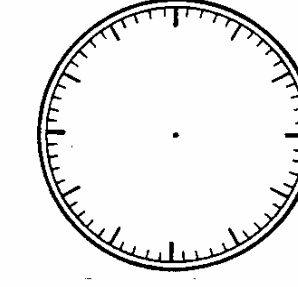
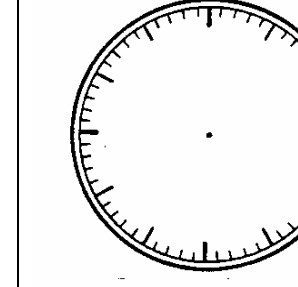
akrep- yelkovan- kadran- dakika çizgisi- saat çizgisi- rakamlar



Saat _____ . / Saat _____ .

5. Aşağıdaki saatlerde Akrepi kırmızı, Yelkovanı mavi ile çiz!

6. Eksik olan rakkamları tamamla!

		
Saat 11. /Saat on bir.	Saat 8. /Saat sekiz.	Saat 6. /Saat altı.
		
Saat 5. /Saat beş.	Saat 1. /Saat bir.	Saat 12. /Saat on iki.

Pekiyi ile kazandın Kazandın Daha kazanamadın/Tarih ve İmza