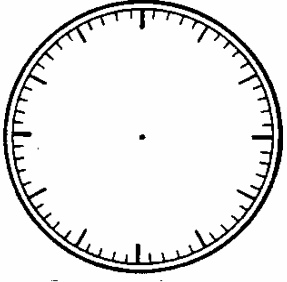
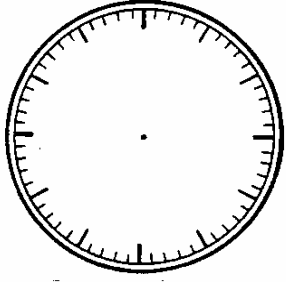
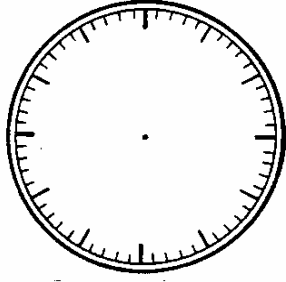
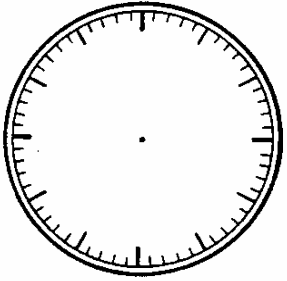
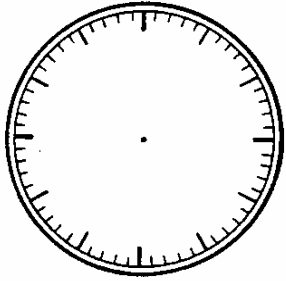
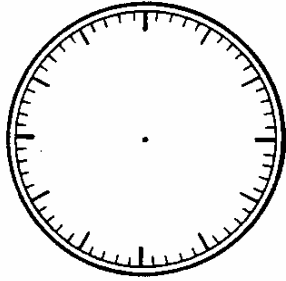
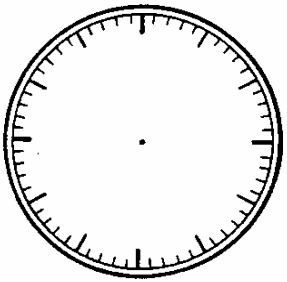
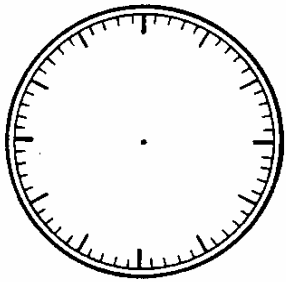
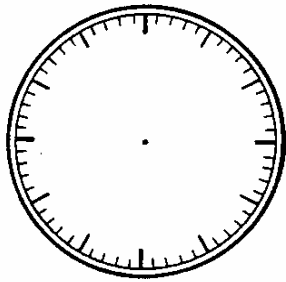




Adım: _____

Tarih: _____

Ehliyet-Saat/ Gümüş/Buçuk

 <p>Saat 7.30 Saat yedi buçuk.</p>	 <p>Saat 9.30 Saat dokuz buçuk.</p>	 <p>Saat 11.30 Saat on bir buçuk.</p>
 <p>Saat 5.30 Saat beş buçuk.</p>	 <p>Saat 4.30 Saat dört buçuk.</p>	 <p>Saat 10.30 Saat on buçuk.</p>
 <p>Saat 6.30 Saat altı buçuk.</p>	 <p>Saat 5.30 Saat beş buçuk.</p>	 <p>Saat 12.30 Saat on iki buçuk.</p>

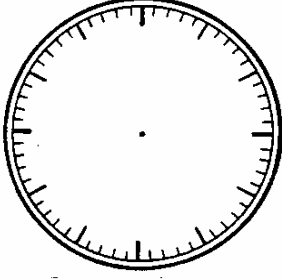
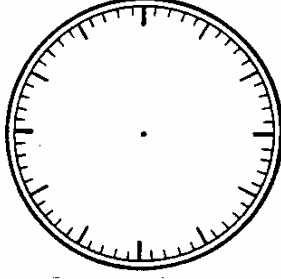
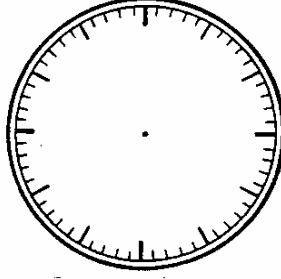
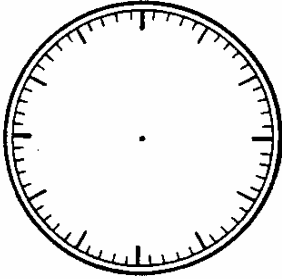
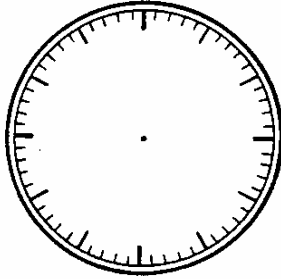
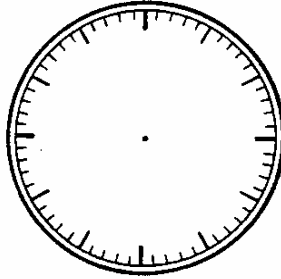
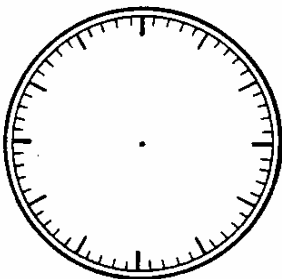
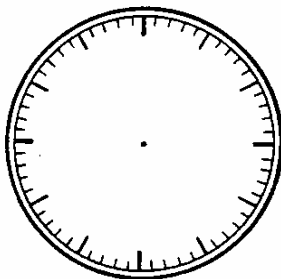
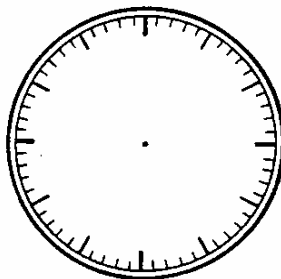
1. Yelkovanı (büyük göstergesi) mavi kalemle çiz!
2. Akrebi (küçük göstergesi) kırmızı kalemle çiz!



Adım: _____

Tarih: _____

Ehliyet-Saat/ Gümüş/Çeyrek Geçiyor

 <p>Saat 7.15 Saat 7' yi çeyrek geçiyor.</p>	 <p>Saat 9.15 Saat 9' u çeyrek geçiyor.</p>	 <p>Saat 11.15 Saat 11' i çeyrek geçiyor.</p>
 <p>Saat 5.15 Saat 5' i çeyrek geçiyor</p>	 <p>Saat 4.15 Saat 4' ü çeyrek geçiyor.</p>	 <p>Saat 10.15 Saat 10' u çeyrek geçiyor.</p>
 <p>Saat 6.15 Saat 6' yi çeyrek geçiyor.</p>	 <p>Saat 5.15 Saat 5' i çeyrek geçiyor.</p>	 <p>Saat 12.15 Saat 12' yi çeyrek geçiyor</p>

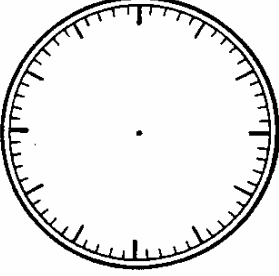
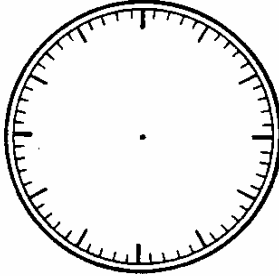
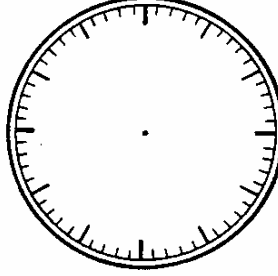
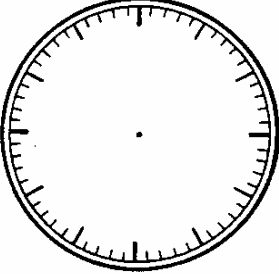
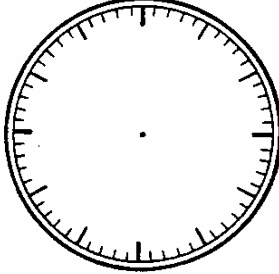
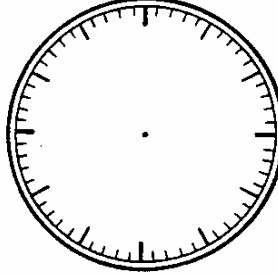
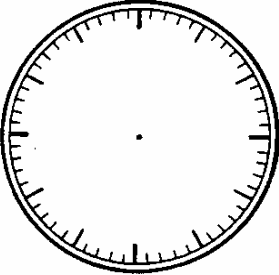
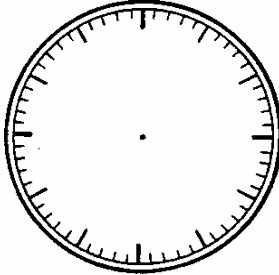
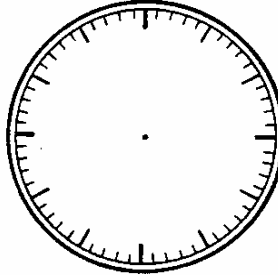
1. Yelkovanı (büyük göstergeyi) mavi kalemle çiz!
2. Akrebi (küçük göstergeyi) kırmızı kalemle çiz!



Adım: _____

Tarih: _____

Ehliyet-Saat / Gümüş /Çeyrek Var

 <p>Saat 7.45 Saat 8' e çeyrek var.</p>	 <p>Saat 9.45 Saat 10' a çeyrek var.</p>	 <p>Saat 8.45 Saat 9' a çeyrek var.</p>
 <p>Saat 5.45 Saat 6' ya çeyrek var.</p>	 <p>Saat 4.45 Saat 5' e çeyrek var.</p>	 <p>Saat 10.45 Saat 11' e çeyrek var.</p>
 <p>Saat 6.45 Saa 7' ye çeyrek var.</p>	 <p>Saat 5.45 Saat 6' ya çeyrek var.</p>	 <p>Saat 11.45 Saat 12' ye çeyrek var.</p>

1. Yelkovanı (büyük göstergeyi) mavi kalemle çiz!
2. Akrebi (küçük göstergeyi) kırmızı kalemle çiz!

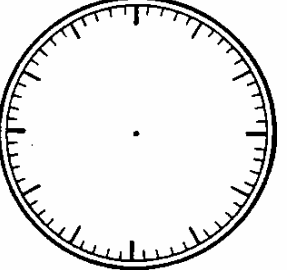
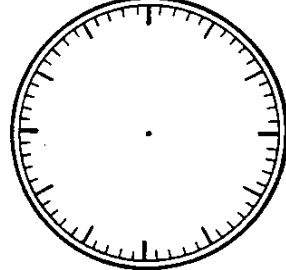
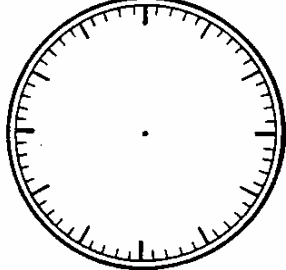
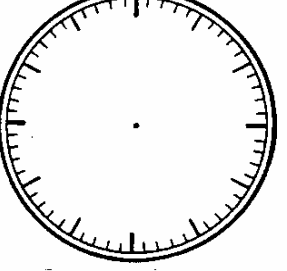
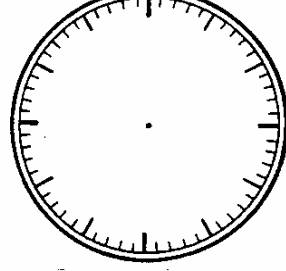
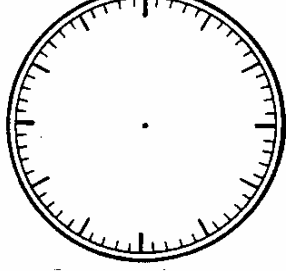
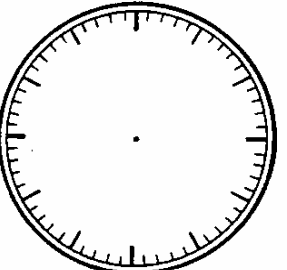
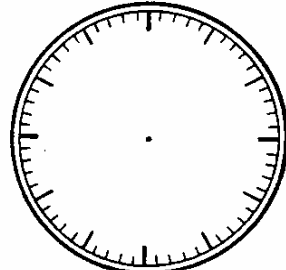
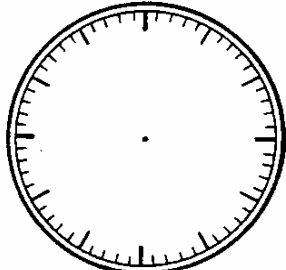


Adım: _____

Tarih: _____

Ehliyet-Saat/ Gümüş /Genel Prova

1. Aşağıdaki saatlerde Akrepi kırmızı, Yelkovanı mavi ile çiz!

 <p>Saat 7.45 Saat 8' e çeyrek var.</p>	 <p>Saat 9.15 Saat 9' u çeyrek geçiyor.</p>	 <p>Saat 11.30 Saat on bir buçuk.</p>
 <p>Saat 5.45 Saat 6' ya çeyrek var.</p>	 <p>Saat 7.30 Saat yedi buçuk.</p>	 <p>Saat 10.45 Saat 11' e çeyrek var.</p>
 <p>Saat 6.15 Saat 6' yı çeyrek geçiyor.</p>	 <p>Saat 5.15 Saat 5' i çeyrek geçiyor.</p>	 <p>Saat 8.45 Saat 9' a çeyrek var.</p>

Sınav için tavsiye: _____

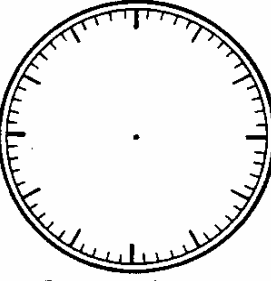
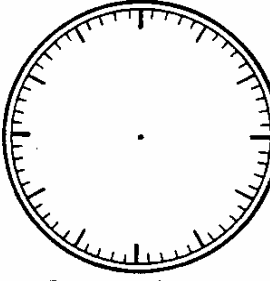
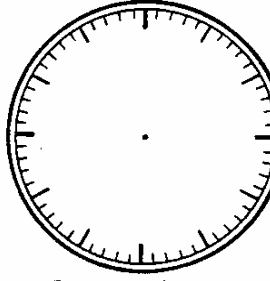
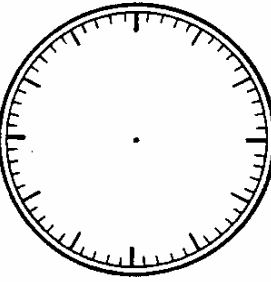
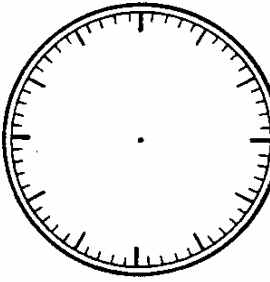
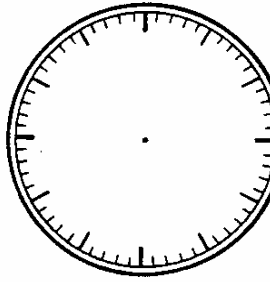
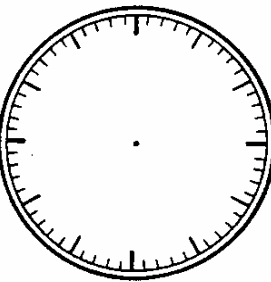
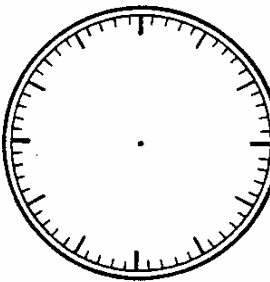
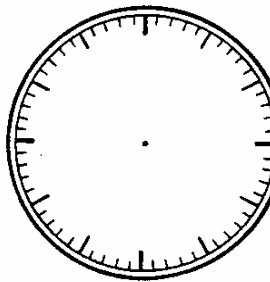


Adım: _____

Tarih: _____

Ehliyet-Saat / Gümüş / Sınav

1. Aşağıdaki saatlerde Akrepi kırmızı, Yelkovanı mavi ile çiz!

 <p>Saat 6.45 Saat 7' ye çeyrek var.</p>	 <p>Saat 8.15 Saat 8' i çeyrek geçiyor.</p>	 <p>Saat 10.45 Saat 11'e çeyrek var.</p>
 <p>Saat 7.45 Saat 8' e çeyrek var.</p>	 <p>Saat 3.15 Saat 3' ü çeyrek geçiyor.</p>	 <p>Saat 12.30 Saat on iki buçuk.</p>
 <p>Saat 4.15 Saat 4' ü çeyrek geçiyor.</p>	 <p>Saat 3.30 Saat üç buçuk.</p>	 <p>Saat 11.45 Saat 12' ye çeyrek var.</p>

Pekiyi ile kazandın Kazandın Daha kazanamadın/Tarih ve İmza